


SUMMER HOLIDAYS HOMEWORK

SESSION
2026-27

CLASS -IV







The days are long and warm,
The nights are calm and cool,
The days are filled with fun,
For our summer break to rule.

We'll take a trip, explore the sights,
Make some memories to last,
Listen to the birds and watch the stars,
And just enjoy the past.

We'll eat some ice cream, play some games,
Laugh, and have some fun,
Because summer break is here,
And it's time to go out and run!

We hope that your child/children will make the most of this summer holiday and enjoy the activities we have prepared for them. Your support and encouragement are always appreciated.

**** Please note that these assignments will be evaluated for subject enrichment of Term I ****



Sneh Public School

Summer Holiday Homework 2026-27

Class-IV

English

Cursive writing book p.g number 5 to 15.

English Work sheet p.g number 1 to 11.

Read and learn given English stories

Hindi

Hindi Cursive book p.g number 1 to 10

Read and learn Hindi stories

Maths


1. Do all given maths worksheets.
2. Learn multiplication tables 2 to 10.
3. Learn Number names.

Science


1. Do all given science worksheets.

S.St

1. Do and Learn all maps .
2. Do lines on Earth day on A – 4 Sheet.



1. The Honest Woodcutter



Once a woodcutter was cutting wood near a river. Suddenly, his axe fell into the water. He started crying. A fairy appeared and asked, "Why are you crying?"

The woodcutter said, "My axe fell into the river."

The fairy went into the river and brought out a golden axe.

"Is this yours?" she asked.

The woodcutter said, "No."

Then she brought a silver axe.

"Is this yours?"







Again he said, "No."

Finally, she brought his iron axe.


The woodcutter smiled and said, "Yes, this is mine."

The fairy was happy with his honesty and gave him all three axes.

Moral: Honesty is the best policy.



2. The Thirsty Crow






It was a hot summer day. A crow was very thirsty. He flew here and there in search of water. At last, he saw a pot with little water in it.


The crow could not reach the water. He thought of an idea. He picked up small stones and dropped them into the pot one by one. Slowly, the water came up.

The crow drank the water and flew away happily.

Moral: Where there is a will, there is a way.



3. The Lion and the Mouse



A lion was sleeping in the jungle. A little mouse started jumping on him. The lion woke up angrily.







He caught the mouse. The mouse said, "Please let me go. I may help you one day."


The lion laughed but let him go.

A few days later, the lion was trapped in a hunter's net. The mouse came and bit the net with his sharp teeth. Soon, the lion was free.


The lion thanked the mouse.

Moral: Kindness is never wasted.







4. The Greedy Dog



One day, a dog found a bone. He was very happy and carried it in his mouth. While crossing a bridge, he looked into the water and saw his reflection. He thought it was another dog with a bigger bone. He barked to snatch that bone. As soon as he opened his mouth, his own bone fell into the water. The dog became sad.



Moral: Greed is harmful.




5. The Fox and the Grapes


A hungry fox was walking in a garden. He saw a bunch of juicy grapes hanging on a vine.

He jumped to get them but could not reach. He tried again and again but failed. At last, he walked away saying, "The grapes are sour."

Moral: It is easy to dislike what we cannot get.



6. The Ant and the Dove



An ant was drinking water from a river. Suddenly, it slipped and fell into the water. A dove sitting on a tree saw the ant in trouble. She quickly dropped a leaf into the water. The ant climbed onto the leaf and saved itself.

Later, a hunter came to catch the dove. The ant saw this and bit the hunter's foot. The hunter missed his aim, and the dove flew away safely.

Moral: One good turn deserves another.






7. The Golden Egg

A farmer had a hen. The hen laid one golden egg every day. The farmer became rich.

But he became greedy and thought, "Why not get all the eggs at once?" He killed the hen, hoping to find many golden eggs inside.

But there was nothing. He lost his hen and became poor again.

Moral: Greed leads to loss.



1. शेर और चूहा

एक जंगल में एक शेर सो रहा था। तभी एक छोटा चूहा उसके ऊपर कूदने लगा।
शेर की नींद खुल गई और वह गुस्सा हो गया।
उसने चूहे को पकड़ लिया। चूहा डर गया और बोला, "महाराज, मुझे छोड़ दीजिए। मैं
कभी आपके काम आ सकता हूँ।"
शेर हँस पड़ा, लेकिन उसने चूहे को छोड़ दिया।
कुछ दिनों बाद शेर शिकारी के जाल में फँस गया। चूहा वहाँ आया और अपने तेज
दाँतों से जाल काट दिया। शेर आज़ाद हो गया।
शिक्षा: किसी को छोटा नहीं समझना चाहिए।

2. प्यासा कौआ

गर्मी का मौसम था। एक कौआ बहुत प्यासा था। वह पानी की तलाश में इधर-उधर
उड़ता रहा।
उसे एक घड़ा दिखा जिसमें थोड़ा पानी था। कौए की चोंच पानी तक नहीं पहुँच रही
थी।
उसने एक उपाय सोचा। वह छोटे-छोटे कंकड़ लाया और घड़े में डालने लगा। धीरे-
धीरे पानी ऊपर आ गया।
कौए ने पानी पिया और खुशी-खुशी उड़ गया।
शिक्षा: जहाँ चाह, वहाँ राह।

3. लालची कुत्ता

एक कुत्ते को रास्ते में एक रोटी मिली। वह उसे मुँह में दबाकर जा रहा था।
रास्ते में उसे एक नदी मिली। जब वह पुल से गुजर रहा था, तो उसने पानी में
अपनी परछाई देखी।
उसे लगा कि पानी में दूसरा कुत्ता है जिसके पास बड़ी रोटी है।
वह भौंकने लगा। जैसे ही उसने मुँह खोला, उसकी रोटी पानी में गिर गई।
कुत्ता उदास हो गया।

शिक्षा: लालच बुरी बला है।**

1. बारिश आई

बारिश आई, बारिश आई,
संग अपने खुशियाँ लाई।
टिप-टिप पानी गिरता जाए,
धरती को ठंडक पहुँचाए।
बच्चे कागज़ नाव चलाएँ,
खुश होकर सब गीत सुनाएँ।
मैडक भी टर्-टर् गाएँ,
मौसम का आनंद बढ़ाएँ।

2. तितली रानी

तितली रानी रंग-बिरंगी,
लगती कितनी प्यारी-प्यारी।
फूलों पर यह मंडराती,
रस पीकर खुश हो जाती।
लाल, पीले, नीले पंख,
जैसे हों सुंदर से रंग।
उड़ती जाए दूर गगन में,
खुशियाँ भर दे हर मन में।

3. मेरा भारत

मेरा भारत सबसे न्यारा,
लगता सबको बहुत प्यारा।
ऊँचे पर्वत, नदियाँ प्यारी,
धरती इसकी सबसे न्यारी।
मिल-जुलकर हम रहें यहाँ,
प्रेम बाँटें सदा जहाँ।
देश हमारा शान है,
भारत मेरी जान है।

1. बारिश आई


बारिश आई, बारिश आई,
संग अपने खुशियाँ लाई।
टिप-टिप पानी गिरता जाए,
धरती को ठंडक पहुँचाए।
बच्चे कागज़ नाव चलाएँ,
खुश होकर सब गीत सुनाएँ।
मैंढक भी टर्-टर् गाएँ,
मौसम का आनंद बढ़ाएँ।

2. तितली रानी

तितली रानी रंग-बिरंगी,
लगती कितनी प्यारी-प्यारी।
फूलों पर यह मंडराती,
रस पीकर खुश हो जाती।
'लाल, पीले, नीले पंख,
जैसे हों सुंदर से रंग।
उड़ती जाए दूर गगन में,
खुशियाँ भर दे हर मन में।

3. मेरा भारत

मेरा भारत सबसे न्यारा,
लगता सबको बहुत प्यारा।
ऊँचे पर्वत, नदियाँ प्यारी,
धरती इसकी सबसे न्यारी।
मिल-जुलकर हम रहें यहाँ,
प्रेम बाँटें सदा जहाँ।
देश हमारा शान है,
भारत मेरी जान है।



Mathematics Worksheet (Grade IV)

A. Write the number names

1. 45,678

2. 90,305

3. 1,23,456

4. 7,08,019

5. 12,345

6. 1,45,678

7. 4,23,109

8. 2,50,001

9. 98,765

10. 3,31,450

11. 1,67,890

12. 5,10,999

13. 2,74,205

14. 3,56,321 =

15. 50,000

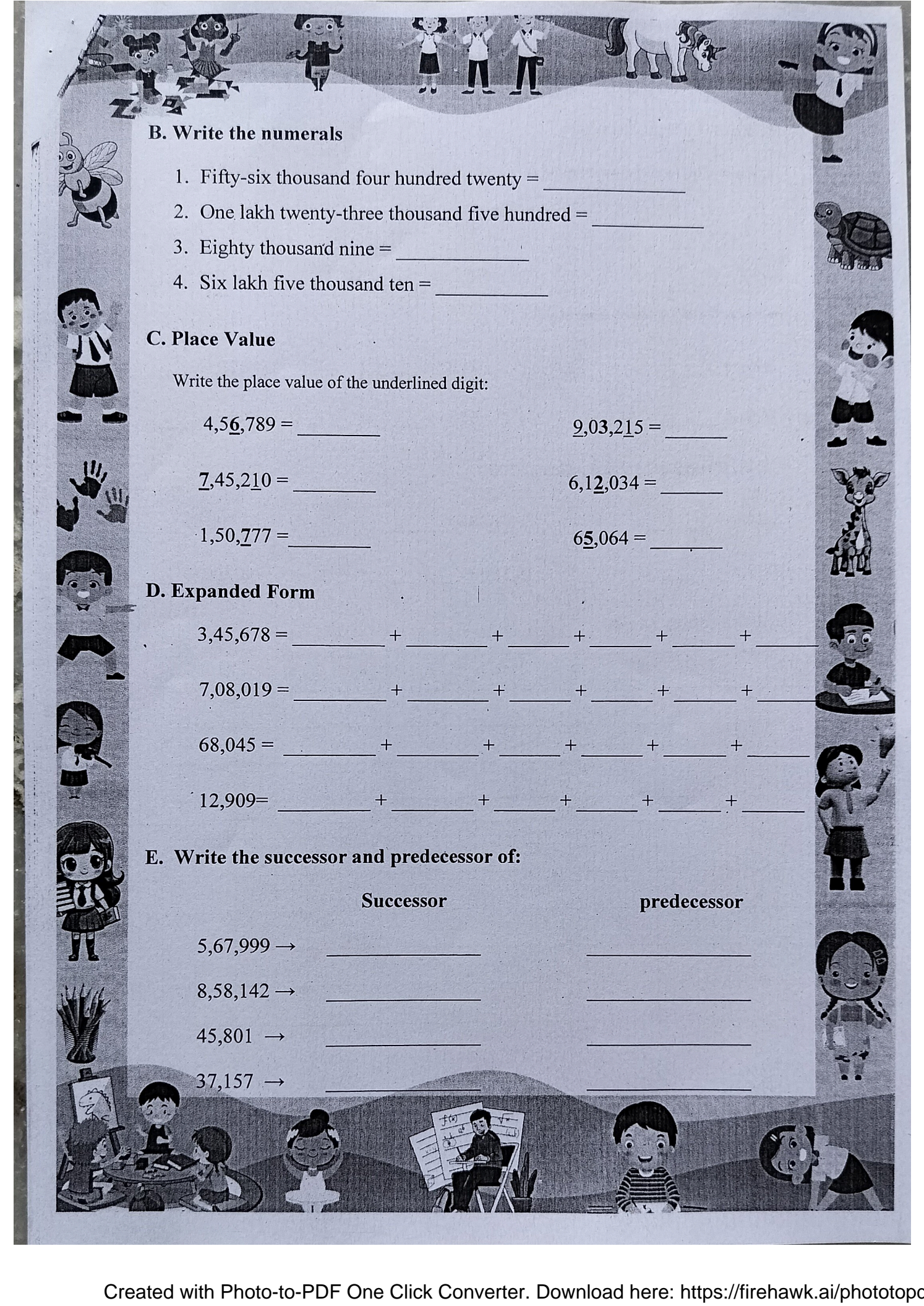
16. 4,44,444

17. 9,99,999

=

18. 10,000

=



B. Write the numerals

1. Fifty-six thousand four hundred twenty = _____
2. One lakh twenty-three thousand five hundred = _____
3. Eighty thousand nine = _____
4. Six lakh five thousand ten = _____

C. Place Value

Write the place value of the underlined digit:

4,56,789 = _____

9,03,215 = _____

7,45,210 = _____

6,12,034 = _____

1,50,777 = _____

65,064 = _____

D. Expanded Form

3,45,678 = _____ + _____ + _____ + _____ + _____ + _____

7,08,019 = _____ + _____ + _____ + _____ + _____ + _____

68,045 = _____ + _____ + _____ + _____ + _____ + _____

12,909 = _____ + _____ + _____ + _____ + _____ + _____

E. Write the successor and predecessor of:

Successor


predecessor

5,67,999 → _____

8,58,142 → _____

45,801 → _____

37,157 → _____



11	12	13	14	15	16	47	18	19	20

SNEH PUBLIC SCHOOL


CLSS-IV

SCIENCE WORKSHEET

1. Choose the correct statement:

- a. Frog is an amphibian as it can live both on land and in water.
- b. A polar bear can live in desert areas.
- c. A camel is an arboreal animal.
- d. Bat is an aerial bird.

2. Look at the picture given below and complete the following sentence:
These are not called the _____.



- a. gas giants
 - b. outer planets
 - c. morning or evening stars
 - d. giant planets
3. Peter is suffering from constipation. Which type of foods should he include in his diet?
- a. Junk foods
 - b. Fatty foods
 - c. Milk and milk products
 - d. Fresh fruits and green leafy vegetables
4. Deepak wrote two statements on the blackboard about different kind of objects:
- 1. Coloured glass is a transparent object.
 - 2. Clear glass is a translucent object.
- Choose the correct option about the above two statements:
- a. Statement 1 is correct but statement 2 is incorrect
 - b. Statement 1 is incorrect but statement 2 is correct
 - c. Both the statements are correct
 - d. Both the statements are incorrect
5. A scrap dealer wants to separate the iron from other scrap materials. Which of the following force he will use to do so?
- a. Electric force
 - b. Muscular force
 - c. Magnetic force
 - d. Frictional force
6. The picture shown below clearly shows the presence of tiny pores called stomata on the underside of the leaf.
What is the function of stomata?
- a. They keep the plant upright.
 - b. They help the plants to breathe.
 - c. They carry the food to other parts of the plant.


d. They absorb water and minerals.

7. Observe the picture shown below and identify the process by which water is heated and changes into steam:




- a. Condensation
b. Evaporation
c. Transpiration
d. Photosynthesis

8. Observe the picture given below. It shows fumes and smoke coming out of a car at a traffic signal. Which of the following pollution is caused by the car?



- a. Air pollution
b. Soil pollution
c. Water pollution
d. Land pollution

9. Given below are pictures of different birds:
Which of them is/are the flightless bird(s)?




- a. Only a
b. Only d
c. Both b and d
d. Both b and c

10. What type of clothes protect us from cold?

- a. Clothes made up of water proof material
b. Long sleeved clothes
c. Thick and warm clothes
d. Both b and c

11. Look at the pictures of animals given below and identify the similarity between them:




- a. They all lay eggs and their ears can be seen.
- b. They all have ears that can be seen.
- c. They all have hair on their skin.
- d. They all lay eggs and their ears cannot be seen.

12. Look at the picture given below:

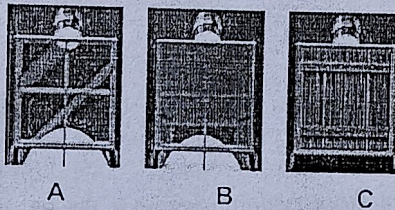
Which of the following systems most likely help the person to break the glass?

- 1. Skeletal system
- 2. Muscular system
- 3. Circulatory system
- 4. Digestive system



- a. 1 and 2
- b. 3 and 4
- c. Only 1
- d. Only 2

13. The picture below shows that some objects allow the light to pass through them while some do not. Identify which among A, B and C is translucent:



- a. A
- b. B
- c. C
- d. None of these

14. Match the column I with the column II and select the correct option:

	Column I		Column II
1.	Vulture	a.	Running bird
2.	Ostrich	b.	Bird of prey
3.	Swan	c.	Scratching bird
4.	Quall	d.	Swimming bird

- a. 1 - b, 2 - a, 3 - d, 4 - c
- b. 1 - b, 2 - a, 3 - c, 4 - d
- c. 1 - b, 2 - d, 3 - a, 4 - c
- d. 1 - d, 2 - a, 3 - b, 4 - c

15. Match the items of Column I with those of Column II and select the correct option:

	Column I		Column II
1.	Terracing	a.	Decayed vegetable or animal matter
2.	Erosion	b.	Cutting down forests
3.	Deforestation	c.	Practised in hilly areas
4.	Humus	d.	To wear away

- a. 1 - d, 2 - c, 3 - b, 4 - a
 c. 1 - b, 2 - a, 3 - d, 4 - c

- b. 1 - c, 2 - d, 3 - b, 4 - a
 d. 1 - a, 2 - b, 3 - c, 4 - d

16. Complete the pattern shown below correctly:
 Aeroplane : Airport :: Ship : _____

- a. Bus stand
 b. Parking area
 c. Train station
 d. Harbour

17. Match column I with column II and select the correct option:

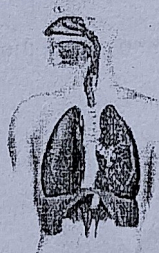
	Column I		Column II
1.	Remove carbon dioxide	a.	Liver
2.	Bean-shaped structure	b.	Small intestine
3.	Absorption of nutrients from food	c.	Kidney
4.	Production of bile	d.	Lungs

- a. 1 - d, 2 - b, 3 - a, 4 - c
 c. 1 - c, 2 - d, 3 - a, 4 - b

- b. 1 - a, 2 - b, 3 - c, 4 - d
 d. 1 - d, 2 - c, 3 - b, 4 - a

18. Carefully look at the respiratory system present in the human body and answer the question below:

Name the sheet of muscles present just below the lungs:




- a. Diaphragm
 b. Bronchioles
 c. Wind pipe
 d. Alveoli
19. What is the similarity seen between metals and bricks?



- a. foul smell
- b. thorns that trap the insect
- c. spiky hairs on the outside
- d. bright colour and sweet nectar

29. The roof is a protective covering to the house. It protects us from various weather conditions and dust.

Identify the place where we find more houses with sloping roofs:



- a. In forests
- b. In desert regions
- c. In the plains
- d. On the hills and mountains

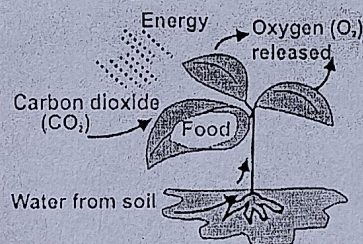
30. Read the passage given below carefully:

X is a very important natural resource and an abiotic component of the environment. It is the uppermost layer of the earth's crust, which supports the growth of plants. It is a non-renewable resource.

Identify X:

- a. Rocks
- b. Water
- c. Soil
- d. None of the above

31. Plants prepare their food through the process of photosynthesis. Plants need carbon dioxide, sunlight and water to prepare their food. In what form do plants store their food?



- a. Cellulose
- b. Starch
- c. Glucose
- d. Salts

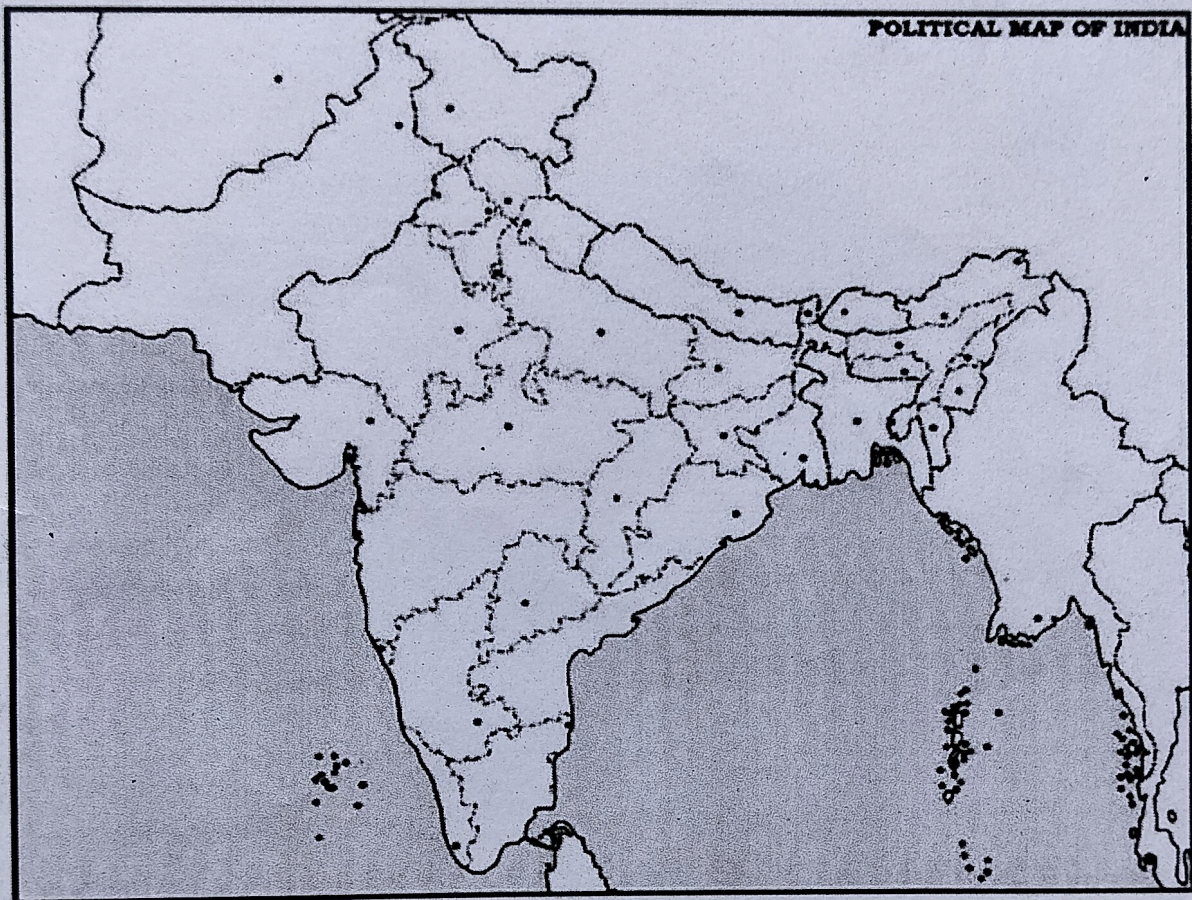
32. Identify the bird which has feet as shown in the figure below:



- a. Rooster
- b. Woodpecker
- c. Crow
- d. Hummingbird

Map Worksheet

1. On the political map of India mark the following.



- a. The largest state in terms of area.
- b. Men and women of this state wear Phiran.
- c. Mussouri, Nainital and Haridwar are few tourist attractions of this state.
- d. This state has two capitals.
- e. The main tourist places of this state are Gangtok and Pelling.
- f. Islands located in the east of India.
- g. Water bodies which surround the southern peninsula.
- h. Any two neighbouring countries which share the land boundary with India.



Summer Vacation

Summer vacation is finally here,
The happiest time of the year.
No school bags and no homework to do,
Just fun and games the whole day through.

Playing outside with friends in the sun,
Eating ice cream and having fun.
Visiting grandparents and hearing their tales,
Flying kites and watching them sail.

These sunny days are full of joy,
Every moment I truly enjoy.