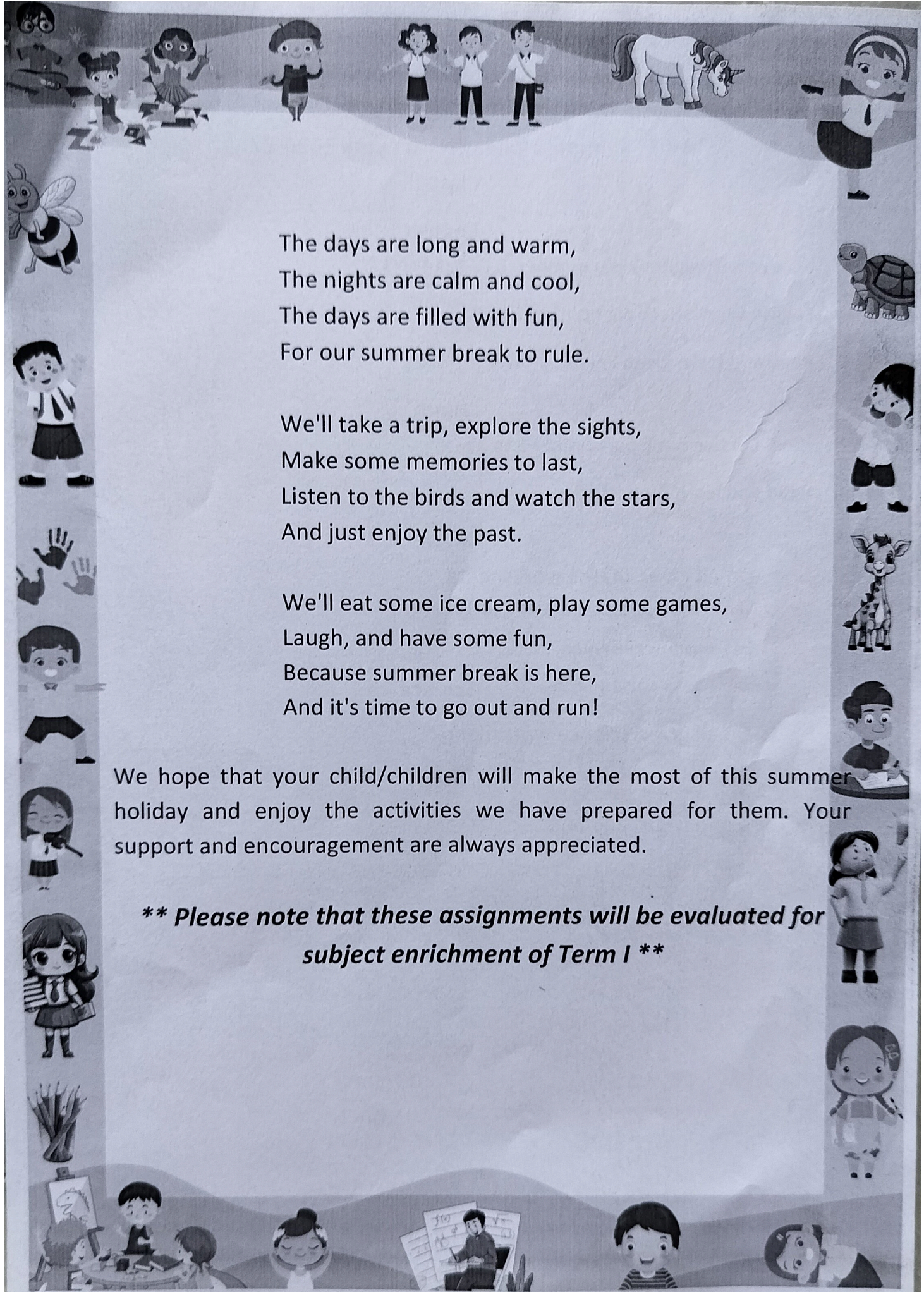


Sueh
Thought with DIFFERENCE

SUMMER HOLIDAYS HOMEWORK

SESSION
2026-27

CLASS -III



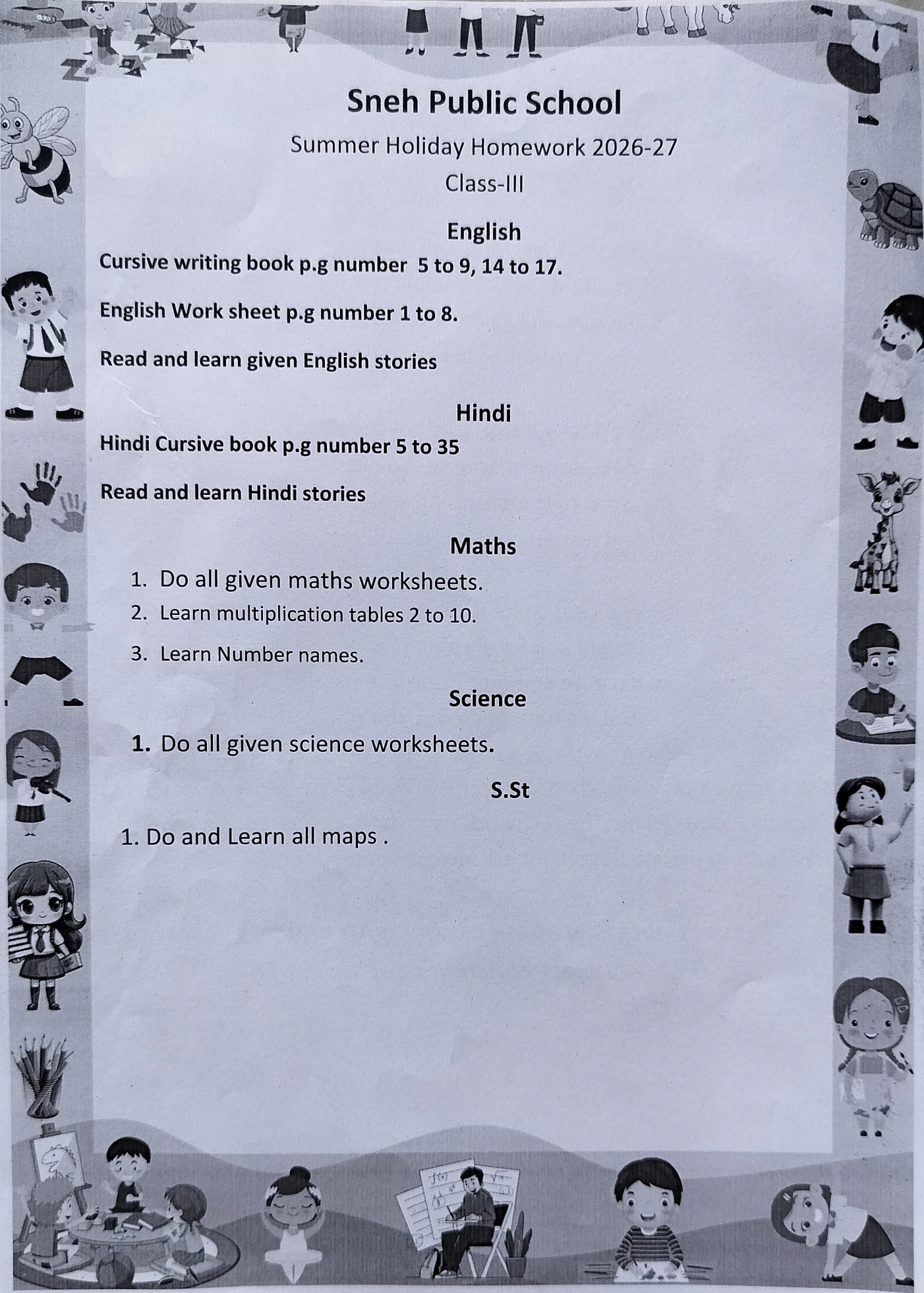
The days are long and warm,
The nights are calm and cool,
The days are filled with fun,
For our summer break to rule.

We'll take a trip, explore the sights,
Make some memories to last,
Listen to the birds and watch the stars,
And just enjoy the past.

We'll eat some ice cream, play some games,
Laugh, and have some fun,
Because summer break is here,
And it's time to go out and run!

We hope that your child/children will make the most of this summer holiday and enjoy the activities we have prepared for them. Your support and encouragement are always appreciated.

***** Please note that these assignments will be evaluated for subject enrichment of Term I *****



Sneh Public School

Summer Holiday Homework 2026-27

Class-III

English

Cursive writing book p.g number 5 to 9, 14 to 17.

English Work sheet p.g number 1 to 8.

Read and learn given English stories

Hindi

Hindi Cursive book p.g number 5 to 35

Read and learn Hindi stories

Maths

1. Do all given maths worksheets.
2. Learn multiplication tables 2 to 10.
3. Learn Number names.

Science

1. Do all given science worksheets.

S.St

1. Do and Learn all maps .



1. My favorite animal:




Introduction. My favorite animal is a dog

Body Dogs are loyal and friendly animals. They make great pets because they are always there to play with you and protect you. They come in all shapes and sizes, from tiny Chihuahuas to large Great Danes. I have a pet dog named Max who is always by my side and loves to play fetch with me.



Conclusion. Overall, dogs are amazing animals and make great companions




2. My summer vacation:




Introduction: This summer, I went on vacation to the beach.

Body The beach was so much fun! I got to swim in the ocean and build sandcastles on the shore. We went on long walks and collected seashells. We also had a bonfire at night and roasted marshmallows. One day, we even went on a boat ride and saw some dolphins swimming in the ocean.



Conclusion. It was a great vacation and I hope to go back to the beach next summer.




3. My best friend:






Introduction. My best friend's name is Sarah

Body Sarah and I have been friends since kindergarten. She is always there for me when I need her and we have so much fun together. We like to play dress up, have tea parties, and go on adventures in the woods behind our house. Sarah is also really good at drawing and she always makes me amazing pictures.




Conclusion Sarah is the best friend anyone could ask for and I'm so lucky to have her in my life.







4. My favorite food:



Introduction. My favorite food is pizza




Body Pizza is a delicious meal that comes in many different flavors. My favorite toppings a pepperoni mushrooms, and olives Pizza is also great because you can eat it hot or cold, and perfect for sharing with friends and family Sometimes, my family and I make our own pizzas at hor and we have a lot of fun adding our favorite toppings




Conclusion: Pizza is definitely my favorite food and I could eat it every day!


5. My hobby:




Introduction My hobby is playing soccer




Body Soccer is a fun sport that requires teamwork and coordination. I love playing soccer with friends because we can work together to score goals and have a good time I also enjoy practicing r skills on my own, like dribbling and shooting. Sometimes, we even have soccer tournaments at school and it's a great way to compete against other teams.



Conclusion Playing soccer is a great hobby and I hope to continue playing for a long time.



Mathematics Worksheet (Grade III)



Write in Words

2,345 = _____

9,001 = _____

6,780 = _____

4,509 = _____

1,245 = _____

3,678 = _____

4,102 = _____

5,999 = _____

7,350 = _____


8,421 = _____

2,786 = _____

6,540 = _____

9,111 = _____

4,890 = _____





Write in Numerals

Three thousand four hundred twenty-one = _____

Eight thousand nine = _____

Seven thousand six hundred = _____

Five thousand one hundred eleven = _____

Two thousand eight hundred thirty = _____

Nine thousand one hundred twelve = _____

Six thousand seven hundred seventy = _____

Four thousand twenty-five = _____

Three thousand three hundred three = _____

Seven thousand forty-five = _____

Place Value & Expanded Form

Write the place value of underlined digit:

6754 → _____

5186 → _____

9472 → _____

4528 → _____

8239 → _____

2947 → _____

Write in expanded form:


- 4,562 = _____
- 7,109 = _____
- 1,002 = _____
- 2,564 = _____

 **Word Problems**

1. A shop has 3,450 toys. It receives 200 more. How many toys are there now?

2. There are 9,000 books in a library. 1,000 are borrowed. How many are left?

3. Riya saved ₹2,500 and then saved ₹1,500 more. How much money does she have now?

 **Add with Carry**

1. $4,789 + 2,456 =$ _____

2. $5,678 + 3,789 =$ _____

3. $2,999 + 1,234 =$ _____

4. $2,345 + 1,234 + 3,210 =$ _____

5. $4,567 + 2,345 + 1,111 =$ _____


6. $2,345 + 1,234 =$ _____

7. $4,567 + 2,111 + 6,472 =$ _____

8. $3,210 + 4,321 =$ _____

9. $5,678 + 1,200 + 1400 =$ _____

10. $7,890 + 1,109 + 2385 =$ _____



10	11	12	13	14	15	16	17



1. ईमानदार लकड़हारा

एक गाँव में एक लकड़हारा रहता था। वह रोज़ जंगल जाकर लकड़ी काटता था। एक दिन उसकी कुल्हाड़ी नदी में गिर गई। वह बहुत दुखी होकर रोने लगा। तभी नदी से एक परी निकली। उसने सोने की कुल्हाड़ी दिखाई। लकड़हारे ने कहा, "यह मेरी नहीं है।"

फिर परी ने चाँदी की कुल्हाड़ी दिखाई। उसने फिर मना कर दिया। अंत में परी लोहे की कुल्हाड़ी लाई। लकड़हारे ने खुशी से कहा, "यही मेरी कुल्हाड़ी है।"

परी उसकी ईमानदारी से खुश हुई और तीनों कुल्हाड़ियाँ उसे दे दीं।

शिक्षा: ईमानदारी सबसे अच्छी नीति है।

2. प्यासा कौआ

एक कौआ बहुत प्यासा था। वह पानी की तलाश में इधर-उधर उड़ रहा था। उसे एक घड़ा मिला जिसमें थोड़ा पानी था।

कौए की चोंच पानी तक नहीं पहुँच रही थी। उसने एक उपाय सोचा। वह छोटे-छोटे कंकड़ उठाकर घड़े में डालने लगा।

धीरे-धीरे पानी ऊपर आ गया। कौए ने पानी पिया और उड़ गया।

शिक्षा: बुद्धि से हर समस्या का समाधान हो सकता है।

3. शेर और चूहा

एक दिन शेर जंगल में सो रहा था। एक छोटा चूहा उसके ऊपर कूदने लगा। शेर जाग गया और चूहे को पकड़ लिया।

चूहे ने कहा, "मुझे छोड़ दो, मैं कभी आपकी मदद करूँगा।"

शेर हँस पड़ा लेकिन उसे छोड़ दिया।

कुछ दिनों बाद शेर शिकारी के जाल में फँस गया।

चूहे ने आकर जाल काट दिया और शेर को छुड़ा दिया।

शिक्षा: छोटा दोस्त भी काम आ सकता है।

SNEH PUBLIC SCHOOL

CLSS-III

SCIENCE WORKSHEET

1. Observe the picture shown below and identify the type of pollution it is most likely to cause;

W: Water

X: Air

Y: Noise

Z: Soil




- a. W only
b. X only
c. Both W and Z
d. Both X and Y
2. Choose the correct option and complete the following sentence:
Mother of my mother is my _____.
- a. grandfather
b. nephew
c. aunt
d. grandmother
3. While working in the kitchen we should avoid wearing clothes made of certain fibres. Identify the fabric which is most dangerous in the kitchen:
- a. Cotton
b. Wool
c. Nylon
d. Jute
4. Look at the pictures given below and identify the similarity between them:



- a. They are social insects since they live together.
b. These insects reproduce by giving birth to their young ones.
c. These insects help flowers to change into fruits.
d. They help to keep the environment clean.
5. It is said that plastic bags and packets should not be thrown in the open.
What is the effect of throwing plastic bags in the drain?
- a. It makes the water in the drain clean.
b. The plastic items block the drain and the dirty water overflows.
c. It lead to air pollution.
d. None of the above

10. Choose the correct option and complete the following sentence:
The given food items are rich in _____.

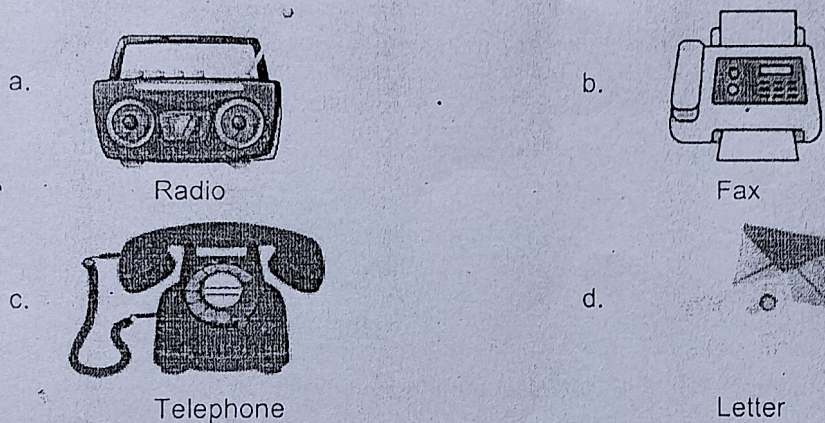


- a. fats
- b. vitamin A
- c. carbohydrates
- d. proteins

11. James learned in school different organs of the human body. Help him identify the organ that is used to pump blood throughout the body:

- a. Brain
- b. Lungs
- c. Heart
- d. Kidney

12. Which of the following is a means of mass communication?



13. Which part of the spinach plant do we eat?

- a. Leaf
- b. Root
- c. Stem
- d. Flower

14. Choose the correct option and complete the following sentence:
The third largest planet in the solar system is _____.


- a. Earth
- b. Uranus
- c. Saturn
- d. Mars

15. How can you contribute to keeping our surroundings clean?

1. We should always throw garbage in the dustbin.
2. We should never cover drains.
3. We should burn dry leaves.


4. We should avoid spitting in public places like parks.
- a. Both 1 and 2
 - b. Both 2 and 3
 - c. Both 3 and 4
 - d. Both 1 and 4

16. Identify the occupation of the person shown in the picture:

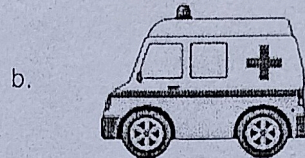


- a. Astronaut
- b. Scientist
- c. Engineer
- d. Plumber


17. Which of the following means of transport can be used by people to travel from one city to another?




Train



Ambulance



Fire truck



School bus


18. What kind of house is usually found in places where it rains a lot?

- a. Mud and straw houses
- b. Houses with a flat roof
- c. Houses with a sloping roof
- d. Tents

19. Which of the following is a good habit?

- a. We should play in the classroom.
- b. We should play and push each other on stairs.
- c. We should play in the playground.
- d. We should touch electrical appliances with wet hands.

20. What feature should be present in a bird like a duck to be able to swim in water?



- a. Hard shells
- c. Webbed feet

- b. Thick skin
- d. Hollow bones and boat-shaped body

21. Which of the following is an insect?

- a. Sparrow
- c. Parrot

- b. Ant
- d. Kiwi

22. Which of the following are an INCORRECT match?

- 1. Bougainvillea – Shrub
- 2. Bottle gourd – Creeper
- 3. Coriander – Shrub
- 4. Grapevine – Creeper

- a. Both 1 and 2
- c. Only 2 and 4

- b. 2, 3 and 4
- d. Only 1 and 3

23. Look at the picture given below:

What are these plants collectively called?



- a. Creepers
- c. Herbs

- b. Climbers
- d. Shrubs

24. Rachel has bleeding gums and yellow teeth. Which of the following nutrient is required for maintaining healthy teeth and gums?

- a. Proteins
- c. Vitamin C


- b. Fats
- d. Iron

25. Which of the following is/are the correct statement about the moon?

- a. It has no atmosphere.
- c. It does not revolve around the sun.

- b. It does not have its own light.
- d. All of the above

26. Unscramble the words to find the rock that was used to make the famous Taj Mahal:







- a. RTNEAGI
- c. KLAHC

- b. BMLAER
- d. DSNATNEOS

27. Ana's teacher tells her the characteristics of a bird:

1. It has a short, hard and horny beak.
2. It makes its nest in a house or a tree with grass, leaves and straws.

Ana's teacher then gives her a task to match a bird that shows the same characteristics. Which bird do you think Ana should choose?



28. The three little rabbits lived happily in their house. One day a giant lion came to destroy and blow off their house. Which of the following house do you think the lion was not able to destroy?

- Rabbit 1: House made of straw.
- Rabbit 2: House made of cloth.
- Rabbit 3: House made of bricks.

- a. House of rabbit 3
- c. House of rabbit 1

- b. House of rabbit 2
- d. None of the above

29. Given below are two groups of animals:

Group 1: Lion, tiger, hyenas

Group 2: Deer, wildebeest, cows

Identify the correct characteristic on the basis of which the animals are grouped:

- a. Group 1: Predators, Group 2: Prey
- b. Group 1: Prey, Group 2: Scavengers
- c. Group 1: Predators, Group 2: Scavengers
- d. Group 1: Prey, Group 2: Carnivores

30. Which organ system is mainly involved for the activity done by the girl as shown in the picture below?



- a. Nervous system
- b. Respiratory system
- c. Excretory system
- d. Digestive system

31. Which of the following is/are the correct match?

X: Milk and milk products - Proteins
 Y: Rice and bread - Carbohydrates
 Z: Lemon and amla - Vitamin C

- a. Only X
- b. Only Y
- c. Only X and Z
- d. X, Y and Z

32. Read the given hint about the plant shown below and identify the plant:
 The oil from this plant is used to treat toothache.



- a. Ginger plant
- b. Maize plant
- c. Mustard plant
- d. Clove plant

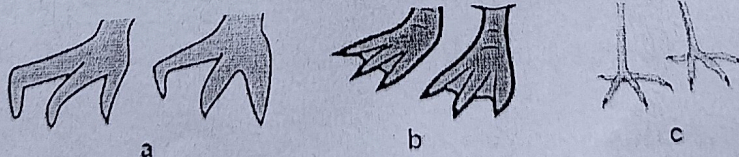
33. Identify which of the following actions are under our control:

1. The movement of our hands and legs.
2. The movement of blood around the body.
3. Chewing our food.
4. The movement of food inside our body.

- a. 2 and 4
- b. 1 and 2
- c. 1 and 3
- d. 3 and 4

34. Refer the given figure showing different types of bird's feet and answer the following questions:

1. Which of these bird's feet is suitable for walking in shallow water?
2. Which of these bird's feet is suitable for capturing their prey?
3. Which of these bird's feet is suitable for paddling and pushing water while swimming?

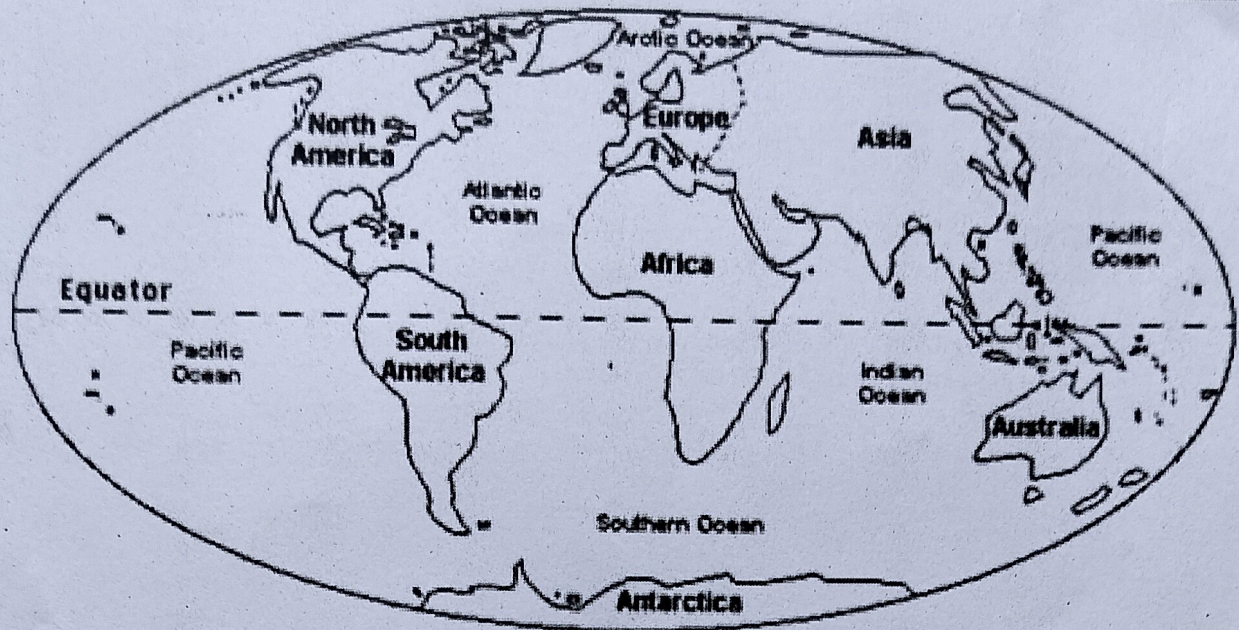


- a. 1 - b, 2 - c, 3 - a
- b. 1 - c, 2 - b, 3 - a
- c. 1 - a, 2 - b, 3 - c
- d. 1 - c, 2 - a, 3 - b

SST

Follow the instructions below.







Name _____





1. Color the continent of Africa green.
2. Color the continent of Antarctica white.
3. Color the continent of Asia yellow.
4. Color the continent of Europe red.
5. Color the continent of Australia brown.
6. Color the continent of North America orange.
7. Color the continent of South America pink.
8. How many continents are there? _____
9. Color the equator (a line) black.
10. Color the oceans blue.
11. I live on the continent of _____



EARTH

1. Earth is a planet.
2. We live on the Earth. 
3. It is round in shape. 
4. It has water and air. 
5. Plants grow on it. 
6. It is home to animals. 
7. It goes around the Sun. 
8. It gives us light and heat.

 **THANK YOU!** 



Summer Vacation

Summer vacation is finally here,
The happiest time of the year.
No school bags and no homework to do,
Just fun and games the whole day through.

Playing outside with friends in the sun,
Eating ice cream and having fun.
Visiting grandparents and hearing their tales,
Flying kites and watching them sail.

These sunny days are full of joy,
Every moment I truly enjoy.